

MATEMATIKA – PREVERIMO ZNANJE

1. Pretvori.

$3 \text{ min} = \underline{\quad\quad} \text{ s}$

$92 \text{ s} = \underline{\quad\quad} \text{ min } \underline{\quad\quad} \text{ s}$

$180 \text{ min} = \underline{\quad\quad} \text{ h}$

$2 \text{ dni} = \underline{\quad\quad} \text{ h}$

$120 \text{ s} = \underline{\quad\quad} \text{ min } \underline{\quad\quad} \text{ s}$



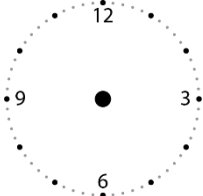

$4 \text{ h} = \underline{\quad\quad} \text{ min}$

$10 \text{ min} = \underline{\quad\quad} \text{ s}$

$550 \text{ s} = \underline{\quad\quad} \text{ min } \underline{\quad\quad} \text{ s}$

$12 \text{ h} = \underline{\quad\quad} \text{ min}$

2. Dopolni preglednico tako, da bosta slika in zapis usklajena.

				
dopoldan			8.20	
popoldan				19.35

3. Pretvori.

$5 \text{ dag} = \underline{\quad\quad} \text{ g}$

$17 \text{ dag } 5 \text{ g} = \underline{\quad\quad\quad} \text{ g}$

$40 \text{ dag} = \underline{\quad\quad} \text{ g}$

$91 \text{ dag } 1 \text{ g} = \underline{\quad\quad\quad} \text{ g}$

$260 \text{ g} = \underline{\quad\quad} \text{ dag}$

$600 \text{ dag} = \underline{\quad\quad} \text{ kg}$

$89 \text{ g} = \underline{\quad\quad} \text{ dag } \underline{\quad\quad} \text{ g}$

$543 \text{ dag} = \underline{\quad\quad} \text{ kg } \underline{\quad\quad} \text{ dag}$

$5 \text{ t} = \underline{\quad\quad\quad} \text{ kg}$

$4 \text{ t } 263 \text{ kg} = \underline{\quad\quad\quad} \text{ kg}$

$6 \text{ t } 500 \text{ kg} = \underline{\quad\quad\quad} \text{ kg}$

$7 \text{ t } 20 \text{ kg} = \underline{\quad\quad\quad} \text{ kg}$

4. Deli in naredi preizkus.

$584 : 3 =$

$607 : 6 =$

$523 : 5 =$

P:

P:

P:

$950 : 4 =$

$745 : 9 =$

$118 : 7 =$

P:

P:

P:

5. Deli in naredi preizkus.

$5670 : 30 =$

$8460 : 20 =$

P:

P:

$7440 : 60 =$

$5310 : 90 =$

P:

P:

6. Zmnoži.

$$\underline{482 \cdot 2}$$

$$\underline{204 \cdot 4}$$

$$\underline{350 \cdot 3}$$

$$\underline{248 \cdot 4}$$

7. Zmnoži.

$$\underline{765 \cdot 10}$$

$$\underline{317 \cdot 30}$$

$$\underline{497 \cdot 20}$$

$$\underline{143 \cdot 60}$$

8. Pisno odštej.

$\begin{array}{r} 674 \\ - 213 \\ \hline \end{array}$	$\begin{array}{r} 725 \\ - 307 \\ \hline \end{array}$	$\begin{array}{r} 246 \\ - 89 \\ \hline \end{array}$	$\begin{array}{r} 575 \\ - 388 \\ \hline \end{array}$	$\begin{array}{r} 126 \\ - 76 \\ \hline \end{array}$
$\begin{array}{r} 972 \\ - 836 \\ \hline \end{array}$	$\begin{array}{r} 425 \\ - 78 \\ \hline \end{array}$	$\begin{array}{r} 266 \\ - 197 \\ \hline \end{array}$	$\begin{array}{r} 830 \\ - 78 \\ \hline \end{array}$	$\begin{array}{r} 651 \\ - 598 \\ \hline \end{array}$

9. Pisno seštej.

$\begin{array}{r} 573 \\ + 409 \\ \hline \end{array}$	$\begin{array}{r} 713 \\ + 199 \\ \hline \end{array}$	$\begin{array}{r} 697 \\ + 85 \\ \hline \end{array}$	$\begin{array}{r} 328 \\ + 84 \\ \hline \end{array}$	$\begin{array}{r} 404 \\ + 396 \\ \hline \end{array}$
$\begin{array}{r} 252 \\ + 479 \\ \hline \end{array}$	$\begin{array}{r} 179 \\ + 488 \\ \hline \end{array}$	$\begin{array}{r} 840 \\ + 77 \\ \hline \end{array}$	$\begin{array}{r} 84 \\ + 616 \\ \hline \end{array}$	$\begin{array}{r} 954 \\ + 27 \\ \hline \end{array}$

10. Reši besedilno nalogo.

Prireditveni prostor so okrasili z baloni bele, modre in rdeče barve. Skupaj jih je bilo 6495. Koliko balonov je bilo modrih, če je bilo balonov vseh treh barv enako? Koliko je bilo skupaj modrih in rdečih?



Odgovor:

Odgovor:

11. Nariši krog s polmerom 2 cm 5 mm in krožnico s premerom 4 cm. Označi središče, polmer in premer.